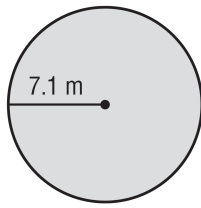
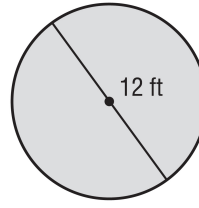


Find the area and circumference of each circle. Round to the nearest tenth.



1) Area: _____

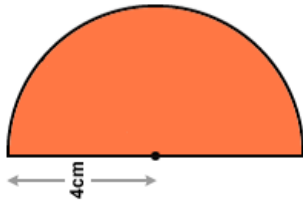
2) Circumference: _____



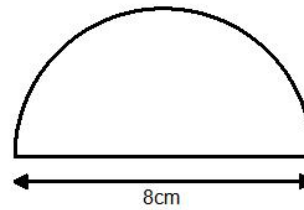
3) Area: _____

4) Circumference: _____

Find the area of each semi-circle



5) Area: _____



6) Area: _____

Solve the following equations.

7. $-3(4x - 7) = -5$

8. $\frac{x+3}{4} = -3$

9. $\frac{1}{2}x + \frac{3}{4} = \frac{4}{3}$

10. $3x + 5 + 4x = 19$